
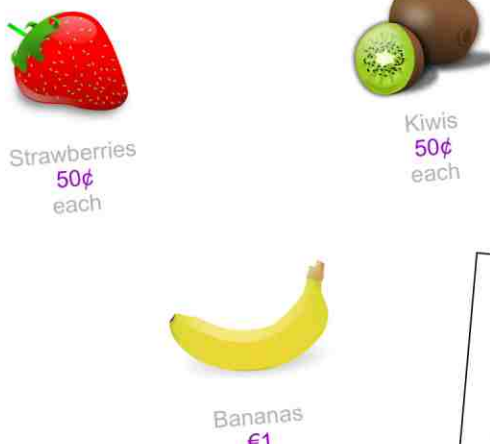


Shopping with Money (€) 'A'



A You have €1 and you want to buy 1 strawberry. How much change will you get?

B You have €1 and you want to buy 1 kiwi. How much change will you get?

C You have €2 and you want to buy 1 banana. How much change will you get?

D You have €2 and you want to buy 2 bananas. How much change will you get?

E You have €2 and you want to buy 2 kiwis. How much change will you get?

Shopping with Money (€) 'B'



B You have €1 and you want to buy tomato. How much change will you get?

D You have €2 and you want to buy 1 kiwi. How much change will you get?

E You have €2 and you want to buy 2 kiwis. How much change will you get?

Shopping with Money (€) 'C'




A You have €5 and you want to buy 2 bananas. How much change will you get?

C You have €5 and you want to buy 1 watermelon. How much change will you get?

E You have €5 and you want to buy 2 watermelons. How much change will you get?

Shopping with Money (€) 'D'



B You have €4 and you want to buy 6 carrots. How much change will you get?

D You have €8 and you want to buy 3 pineapples. How much change will you get?

E You have €7 and you want to buy 2 pineapples. How much change will you get?

Shopping with Money (€) 'E'



A You have €5 and you want to buy 1 bunch of grapes and 1 watermelon. How much change will you get?

C You have €8 and you want to buy 2 watermelons and 2 bunches of grapes. How much change will you get?

E You have €10 and you want to buy 2 bunches of grapes and 2 watermelons. How much change will you get?

Shopping with Money (€) 'F'



B You have €8.30 and you want to buy 2 pumpkins. How much change will you get?

D You have €6.35 and you want to buy 3 kiwis and 4 tomatoes. How much change will you get?

E You have €7.75 and you want to buy 3 kiwis and 4 tomatoes. How much change will you get?

Shopping with Money (€) 'G'



A You have €2.50. How many carrots can you buy?

C You have €5.50. How many pears can you buy?

E You have €10 and you want to buy 2 bunches of grapes and 2 watermelons. How much change will you get?

Shopping with Money (€) 'H'



B You have €3.50. How many mushrooms can you buy?

D You have €1.75. How many cherries can you buy?

E You have €7.15. How many mushrooms can you buy?

Shopping with Money (€) 'I'



A You have €1.05 and you want to buy 2 watermelons and 2 oranges. How much change will you get?

B You have €1.75 and you want to buy 1 watermelon and 1 orange. How much change will you get?

C You have €3.50 and you want to buy 2 watermelons and 2 oranges. How much change will you get?

Shopping with Money (€) 'J'



C You have €3.50 and you want to buy 2 watermelons and 2 oranges. How much change will you get?

D You have €7.15 and you want to buy 2 watermelons and 2 oranges. How much change will you get?

Shopping with Money (€) 'K'



A You have €1.75 and you want to buy 1 watermelon and 1 orange. How much change will you get?

B You have €3.50 and you want to buy 2 watermelons and 2 oranges. How much change will you get?

C You have €7.15 and you want to buy 2 watermelons and 2 oranges. How much change will you get?

Shopping with Money (€) Answers

	A	B	C	D	E	F	G	H	I	J
A	50c	50c	€1	€1	€2	€1	€2	€1	€2	€1
B	50c	50c	€1	€1	€2	€1	€1	€2	€2	€2
C	€2	€6.50	€3	€5	€3	€1	€3.50	€1.50	€4	€2
D	€3	€2	€4	€2	€2	€4	€2	€2	€2	€4
E	€1.50	€1	€1	€3.50	€4	€2	€1.50	€7	€1.50	€2.50
F	€4	€4	50c	80c	€1.30	€1.70	€6.20	€4.60	€4.50	
G	10	4	25	2	2	2	2	2	2	2
H	23	5c	3	no	2	€	27	12	15	
I	90c	10	10	10	10	10	10	10	10	10
J	€2.40	€5	€3.15	€3.60	€3.60	€3.60	€3.60	€3.60	€3.60	€3.60
K	€3.85	€4.50	€4.50	€4.50	€4.50	€4.50	€4.50	€4.50	€4.50	€4.50

Name: _____ Date: _____